

Name _____



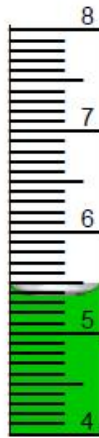
Science

Class _____

Date _____

Homework # 14

1. Record the measurement on the line below each graduated cylinder, making sure use one decimal place and label your units in ml.



2. Calculate the volume of the following:

- A box whose length is 5 cm, whose width is 2 cm and whose depth is 1 cm.
- A box whose length is 10 cm, whose width is 6 cm and whose depth is 2 cm.
- An box whose length is 10 cm, whose width is 6.5 cm whose depth is 2 cm.
- A book whose length is 30 mm, whose width is 20 mm and whose depth is 10 mm.

Extra credit:

What is larger 10 m³ or 10 yd³. Explain why.